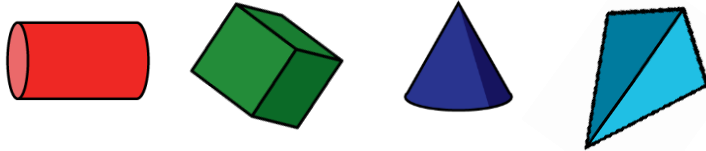


Name _____

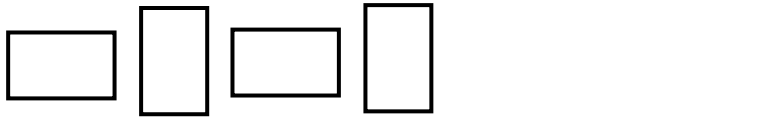
1 Match each shape to its name.



cube cylinder pyramid cone

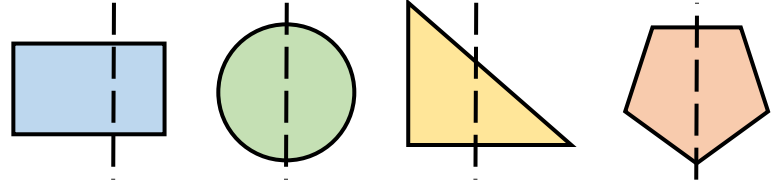
1 mark

2 Draw the next two shapes in each pattern.



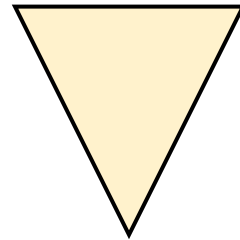
2 marks

3 Circle the shapes with a correct line of symmetry.



1 mark

4 Complete the sentences.

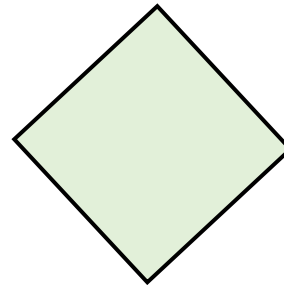


This is a triangle

It has sides.

It has 3 vertices.

1 mark



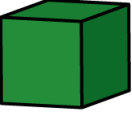

This is a _____

It has sides.


It has vertices.

2 marks

5 Complete the table.

Shape	Faces	Edges	Vertices
 Cube	6		8
 Square-based pyramid		8	5

6 Rosie is holding a 3-D shape. She is counting the number of 2-D faces she can see.



I can see 4 rectangles and 2 squares.

What shape is Rosie holding?

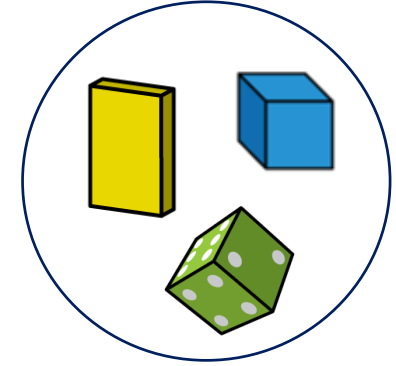



2 marks

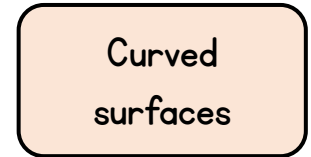
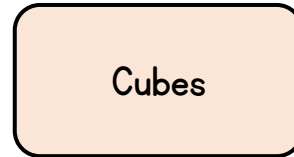
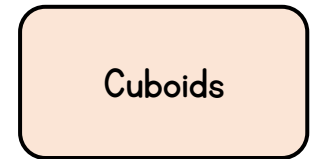
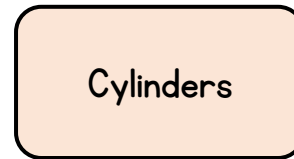


1 mark

7 Amir has sorted some 3-D shapes.



Choose one correct label for each group from the labels below.



2 marks

Circle how confident you feel with shape.

1 2 3 4 5
 Not Very
 confident confident