


Name _____

1 Georgia and Dan each have some counters.



Georgia's Counters

Dan's Counters

Write down a multiplication to work out how many counters Georgia has.

$$\square \times \square = \square$$

1 mark

Write down a multiplication to work out how many counters Dan has.

$$\square \times \square = \square$$

1 mark


How many counters do they have altogether?

1 mark

_____ counters

2 Amir is working out 37×4

He uses place value counters to help him.




Work out 37×4

Show all your working.

1 mark

3



How many pens in total?

_____ pens

1 mark

